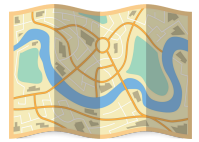




MAP AND DIRECTIONS



24



Study the map above and answer the following questions:

• What building is in between the pet shop and the grocery store?

• Ans: _____

• What building is located in front of the church?

• Ans: _____

• What building is on the left of City Hall?

• Ans: _____

• How many streets should I take before I reach the hospital?

• Ans: _____

• What body of water will you see near the school?

• Ans: _____

• What buildings will I pass on my way back from the café to the school?

• Ans: _____

• If I visit the waterfalls and I want to go to the lake next, what directions should I take?

• Ans: _____