


Name: _____

Class: _____




APPLE MATH




Finish the exercises and write the answer in the apple.


$7+1=$




$1+2=$



$5+3=$




$6+2=$




$2+0=$



$3+4=$




$5+0=$




$3+1=$




$5+2=$




$9+0=$



$4+4=$




$3+4=$




$2+4=$




$5+5=$




$1+3=$




$3+1=$




$4+6=$




$3+4=$



$2+6=$



$3+3=$



$2+6=$

