

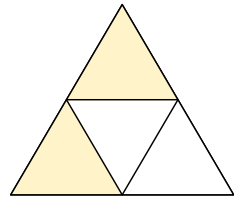
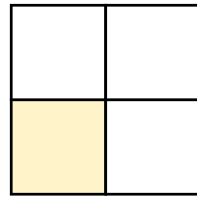
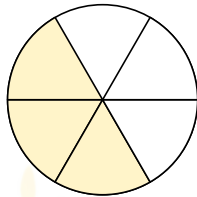
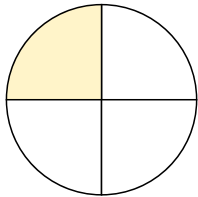
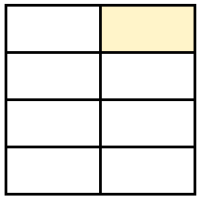
Name: \_\_\_\_\_ Date: \_\_\_\_\_

# NUMBER & ALGEBRA

## FRACTIONS

Identify and represent the fractions in different shapes as directed below.

Write the fraction that each shaded part of the shape represents:



\_\_\_\_\_

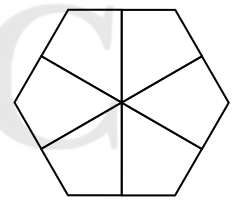
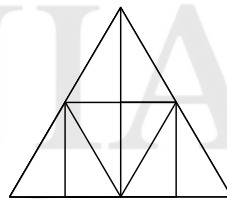
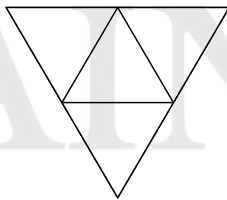
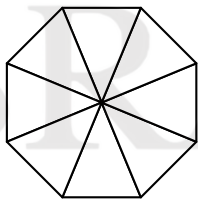
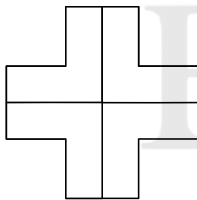
\_\_\_\_\_

\_\_\_\_\_

\_\_\_\_\_

\_\_\_\_\_

Shade each shape according to the fraction:



$$\frac{1}{2}$$

$$\frac{1}{4}$$

$$\frac{2}{4}$$

$$\frac{1}{8}$$

$$\frac{1}{2}$$

Find the total for each of the following addition problems:

