







Secret Code Addition



24



Hi, secret agent! Let's crack the secret code to solve the math problems. Use the chart below to rewrite the problems using numbers.



									
0	1	2	3	4	5	6	7	8	9



	+		
2	+	4	= 6



	+		
___	+	___	= ___



	+		
___	+	___	= ___



	+		
___	+	___	= ___

	+		
___	+	___	= ___

	+		
___	+	___	= ___

	+		
___	+	___	= ___

	+		
___	+	___	= ___

	+		
___	+	___	= ___